

Write your name here

Surname

Other names

**Pearson Edexcel**  
**International**  
**Advanced Level**

Centre Number

--	--	--	--	--

Candidate Number

--	--	--	--

# Mechanics M1

## Advanced/Advanced Subsidiary

Wednesday 8 June 2016 – Morning

**Time: 1 hour 30 minutes**

Paper Reference

**WME01/01****You must have:**

Mathematical Formulae and Statistical Tables (Blue)

Total Marks

--

**Candidates may use any calculator allowed by the regulations of the Joint Council for Qualifications. Calculators must not have the facility for symbolic algebra manipulation, differentiation and integration, or have retrievable mathematical formulae stored in them.**

### Instructions

- Use **black** ink or ball-point pen.
- If pencil is used for diagrams/sketches/graphs it must be dark (HB or B). Coloured pencils and highlighter pens must not be used.
- **Fill in the boxes** at the top of this page with your name, centre number and candidate number.
- Answer **all** questions and ensure that your answers to parts of questions are clearly labelled.
- Answer the questions in the spaces provided  
– *there may be more space than you need.*
- You should show sufficient working to make your methods clear. Answers without working may not gain full credit.
- Whenever a numerical value of  $g$  is required, take  $g = 9.8 \text{ m s}^{-2}$ , and give your answer to either two significant figures or three significant figures.
- When a calculator is used, the answer should be given to an appropriate degree of accuracy.

### Information

- The total mark for this paper is 75.
- The marks for **each** question are shown in brackets  
– *use this as a guide as to how much time to spend on each question.*

### Advice

- Read each question carefully before you start to answer it.
- Try to answer every question.
- Check your answers if you have time at the end.

Turn over ►

P46705A

©2016 Pearson Education Ltd.

1/1/1/


**PEARSON**

Leave  
blank

1. A car is moving along a straight horizontal road with constant acceleration  $a \text{ m s}^{-2}$  ( $a > 0$ ). At time  $t = 0$  the car passes the point  $P$  moving with speed  $u \text{ m s}^{-1}$ . In the next 4 s, the car travels 76 m and then in the following 6 s it travels a further 219 m.

Find

- (i) the value of  $u$ ,  
(ii) the value of  $a$ .

(7)

DO NOT WRITE IN THIS AREA

DO NOT WRITE IN THIS AREA

DO NOT WRITE IN THIS AREA



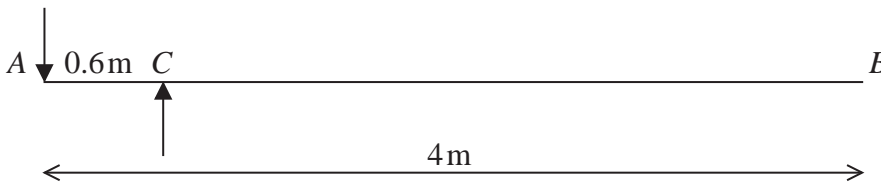






Leave blank

4.



**Figure 1**

A diving board  $AB$  consists of a wooden plank of length  $4\text{ m}$  and mass  $30\text{ kg}$ . The plank is held at rest in a horizontal position by two supports at the points  $A$  and  $C$ , where  $AC = 0.6\text{ m}$ , as shown in Figure 1. The force on the plank at  $A$  acts vertically downwards and the force on the plank at  $C$  acts vertically upwards.

A diver of mass  $50\text{ kg}$  is standing on the board at the end  $B$ . The diver is modelled as a particle and the plank is modelled as a uniform rod. The plank is in equilibrium.

- (a) Find
    - (i) the magnitude of the force acting on the plank at  $A$ ,
    - (ii) the magnitude of the force acting on the plank at  $C$ .
- (6)**

The support at  $A$  will break if subjected to a force whose magnitude is greater than  $5000\text{ N}$ .

- (b) Find, in  $\text{kg}$ , the greatest integer mass of a diver who can stand on the board at  $B$  without breaking the support at  $A$ .
- (3)**
- (c) Explain how you have used the fact that the diver is modelled as a particle.
- (1)**

---

---

---

---

---

---

---

---

---

---

---

---

---

---

---

DO NOT WRITE IN THIS AREA

DO NOT WRITE IN THIS AREA

DO NOT WRITE IN THIS AREA

Leave blank

**Question 4 continued**

DO NOT WRITE IN THIS AREA

DO NOT WRITE IN THIS AREA

DO NOT WRITE IN THIS AREA

Lined area for writing the answer to Question 4.



Leave blank

5. Two forces,  $\mathbf{F}_1$  and  $\mathbf{F}_2$ , act on a particle  $A$ .

$\mathbf{F}_1 = (2\mathbf{i} - 3\mathbf{j})$  N and  $\mathbf{F}_2 = (p\mathbf{i} + q\mathbf{j})$  N, where  $p$  and  $q$  are constants.

Given that the resultant of  $\mathbf{F}_1$  and  $\mathbf{F}_2$  is parallel to  $(\mathbf{i} + 2\mathbf{j})$ ,

(a) show that  $2p - q + 7 = 0$  (5)

Given that  $q = 11$  and that the mass of  $A$  is 2 kg, and that  $\mathbf{F}_1$  and  $\mathbf{F}_2$  are the only forces acting on  $A$ ,

(b) find the magnitude of the acceleration of  $A$ . (5)

---

---

---

---

---

---

---

---

---

---

---

---

---

---

---

---

---

---

---

---

---

---

---

---

---

DO NOT WRITE IN THIS AREA





Leave  
blank

6.




Figure 2

Two cars, *A* and *B*, move on parallel straight horizontal tracks. Initially *A* and *B* are both at rest with *A* at the point *P* and *B* at the point *Q*, as shown in Figure 2. At time  $t = 0$  seconds, *A* starts to move with constant acceleration  $a \text{ m s}^{-2}$  for 3.5 s, reaching a speed of  $14 \text{ m s}^{-1}$ . Car *A* then moves with constant speed  $14 \text{ m s}^{-1}$ .

- (a) Find the value of  $a$ . (2)

Car *B* also starts to move at time  $t = 0$  seconds, in the same direction as car *A*. Car *B* moves with a constant acceleration of  $3 \text{ m s}^{-2}$ . At time  $t = T$  seconds, *B* overtakes *A*. At this instant *A* is moving with constant speed.

- (b) On a diagram, sketch, on the same axes, a speed-time graph for the motion of *A* for the interval  $0 \leq t \leq T$  and a speed-time graph for the motion of *B* for the interval  $0 \leq t \leq T$ . (3)

- (c) Find the value of  $T$ . (8)

- (d) Find the distance of car *B* from the point *Q* when *B* overtakes *A*. (1)

- (e) On a new diagram, sketch, on the same axes, an acceleration-time graph for the motion of *A* for the interval  $0 \leq t \leq T$  and an acceleration-time graph for the motion of *B* for the interval  $0 \leq t \leq T$ . (3)

---

---

---

---

---

---

---

---

---

---

---

---

---

---

---

---

---

---

---

---

---

---

---

---

---

---

DO NOT WRITE IN THIS AREA

DO NOT WRITE IN THIS AREA

DO NOT WRITE IN THIS AREA



Leave  
blank

**Question 6 continued**

Lined area for writing the answer to Question 6.

DO NOT WRITE IN THIS AREA

DO NOT WRITE IN THIS AREA

DO NOT WRITE IN THIS AREA



Leave blank

7.

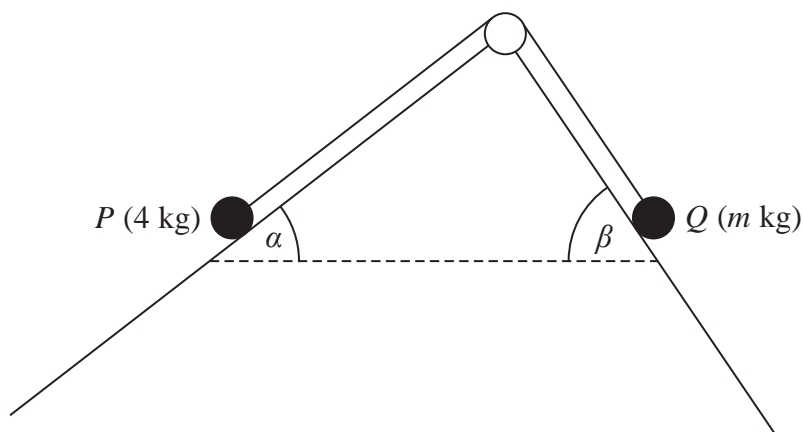


Figure 3

A particle  $P$  of mass 4 kg is attached to one end of a light inextensible string. A particle  $Q$  of mass  $m$  kg is attached to the other end of the string. The string passes over a small smooth pulley which is fixed at a point on the intersection of two fixed inclined planes. The string lies in a vertical plane that contains a line of greatest slope of each of the two inclined planes. The first plane is inclined to the horizontal at an angle  $\alpha$ , where  $\tan \alpha = \frac{3}{4}$  and the second plane is inclined to the horizontal at an angle  $\beta$ , where  $\tan \beta = \frac{4}{3}$ . Particle  $P$  is on the first plane and particle  $Q$  is on the second plane with the string taut, as shown in Figure 3.

The first plane is rough and the coefficient of friction between  $P$  and the plane is  $\frac{1}{4}$ . The second plane is smooth. The system is in limiting equilibrium.

Given that  $P$  is on the point of slipping down the first plane,

- (a) find the value of  $m$ , (10)
- (b) find the magnitude of the force exerted on the pulley by the string, (4)
- (c) find the direction of the force exerted on the pulley by the string. (1)

---

---

---

---

---

---

---

---

DO NOT WRITE IN THIS AREA

DO NOT WRITE IN THIS AREA

DO NOT WRITE IN THIS AREA



